



B.M. BHARTI MODEL SCHOOL

**SUMMER
VACATION**

HOLIDAYS HOMEWORK

CLASS- III

Name : _____
Class & Section : _____
Roll No. : _____
Father's Name : _____

INSTRUCTIONS FOR STUDENTS DURING SUMMER HOLIDAYS HOMEWORK

Dear Students,

Summer vacation is a time to relax, refresh, and enjoy with family and friends. Along with fun and recreation, complete your holiday homework sincerely and neatly. Follow these instructions carefully:

1. Complete all work on time and submit it after the vacation.
2. Maintain neatness and proper presentation in every subject.
3. Use your own handwriting and avoid copying from others.
4. Read all instructions carefully before starting the work.
5. Make your work creative, colourful, and attractive wherever required.
6. Revise the work done in class regularly during the holidays.
7. Spend some time daily in reading books, newspapers, or storybooks.
8. Practice good handwriting and learn new words every day.
9. Parents are requested to guide and encourage students, but the work should be done by the students themselves.
10. Keep all notebooks and holiday homework sheets properly covered and labelled.
11. Maintain discipline and balance studies with play, exercise, and rest.
12. Take care of your health, eat healthy food, and stay hydrated during summer.
13. Enjoy your holidays and return to school with fresh energy and enthusiasm.
14. Worksheets will be done on worksheets itself.

 **“Learning never stops when creativity and curiosity continue.”** 



Build a Simple Daily Rhythm

(Not a Strict Routine!)

Kids don't need pressure,
they need structure + fun.



Morning

Study time +
Homework



Midday

Creative time
(Art, Craft, Reading)



Evening

Outdoor play /
Sports



Night

Family time +
Storytelling



10 Smart Ways to Make Summer Productive



-   20 mins daily reading habit
-   Practice writing / journaling
-   Creative play (painting, stamping, DIY)
-   Puzzle / brain games
-   Outdoor play every day
-   Help in small household chores
-   Learn a hobby (dance/music/instrument)
-   Improve communication (storytelling, conversations)
-   Nature time / gardening
-   Family bonding activities



ENGLISH
Worksheet-1

Q1. Fill in the blanks with the correct Collective Noun from the box.

[Army | School | Swarm | Forest | Litter]

- (1) A _____ of bees flew over the garden.
- (2) We saw a _____ of kittens under the porch.
- (3) The _____ of fish swam through the coral reef.
- (4) An _____ of ants marched toward the picnic basket.
- (5) A thick _____ of trees covered the mountain.

Q2. Circle the proper nouns in the following sentences:

- (1) Rohit is my best friend.
- (2) We are going to London in December.
- (3) My cat, Fluffy, likes to play.
- (4) Ravi reads the newspaper every morning.
- (5) The Taj Mahal is in Agra.

Q3. Match the common noun with a suitable proper noun:

Common noun.	Proper noun
(1) Country.	a) Jaco
(2) Girl.	b) India
(3) Dog.	c) Sara
(4) City.	d) London

Q4. Underline the common nouns in the sentences below:

- (1) The cat is under the table.
- (2) My sister likes mangoes.
- (3) The boy runs in the park.
- (4) She brought a new book from the shop.
- (5) The doctor works in a big hospital.

ENGLISH
Worksheet-2

Q1. Fill in the missing gender for each word below.

- **Masculine:** Wizard - **Feminine:** _____
- **Masculine:** Hero - **Feminine:** _____
- **Feminine:** Nun - **Masculine:** _____
- **Masculine:** Tiger - **Feminine:** _____

Q2. Rewrite these sentences correctly:

(1) The **cat** chased the **mouse**. (Make both underline words plural)

(2) I put the **glass** on the **shelf**. (Make both bold words plural)

(3) The **baby** has two **tooth**. (Fix the plural form of the bold words)

Q3. Identify Noun Types.

Read the sentences below and identify if the bold word is **Proper**, **Common**, or **Collective**.

1: We saw a **pride** of lions at the zoo. _____

2: **Wednesday** is my favorite day of the week. _____

3: The **teacher** is writing on the board. _____

4: A **flock** of birds flew over the house. _____

5: My cousin lives in **London**. _____

Project Work

Q.1 Make a scrapbook of 2 vocabulary words of each day.

Q.2 Do one page of writing daily.

Q.3 Prepare a poster on types of noun (Roll No: 1-15)

Prepare a poster on punctuation marks (Roll No- 16- 30)

Maths
Worksheet 1

Q1. Write the number names of the following numerals.

1. 4213 = _____

2. 6005 = _____

Q2. Write the numerals of the following number names.

1. Six thousand fifty = _____

2. Eight thousand four hundred ninety six = _____

Q3. Write the following number in the expanded form.

a) 5394 = _____

b) 7088 = _____

Q4. Observe the pattern and fill in the blanks.

a) 2516, 2526, 2536, _____ , _____

b) 3635, 4635, 5635, _____ , _____

Q5. Write the place value of the digits.

a) 7216 _____

b) 4019 _____

Q6. Compare the numbers and put (> , < or =) in the box.

a) 524 7219

b) 6219 6019

c) 3971 3971

Q7. Write the successor of the following:

a) 8530 _____

b) 2579 _____

Maths
Worksheet 2

Q1. Circle the greatest number.

a) 5219, 7346, 2513, 3764

b) 4019, 4910, 9170, 9410

Q2. Circle the smallest number.

a) 8091, 8572, 8512, 8152

b) 5001, 5010, 5100, 5101

Q3. Arrange the following numbers in ascending order.

a) 2519, 734, 9152, 6394 _____

b) 6517, 6571, 6572, 6275 _____

Q4. Arrange the following numbers in descending order.

a) 2501, 4019, 2051, 5901

b) 8163, 816, 6381, 3816

Q5. Write the predecessor of the following:

a) 8530 _____

b) 2800 _____

Q6. Write the predecessor of the smallest 4-digit number.

Ans. _____

Q7. Write the successor of the greatest 3-digit number.

Ans. _____

Q8. Fill in the blanks.

a) 3 tens + 16 ones = _____ tens 6 ones

- b) 17 tens = _____ hundred _____ tens
- c) 8 hundred + 17 tens = _____ hundred _____ tens
- d) 19 tens = _____ hundred _____ tens

Q9. Add the following.

$$\begin{array}{r} \text{H T O} \\ 487 \\ + 295 \\ \hline \\ \hline \end{array}$$

$$\begin{array}{r} \text{H T O} \\ 374 \\ + 269 \\ \hline \\ \hline \end{array}$$

$$\begin{array}{r} \text{TH H T O} \\ 853 \\ + 245 \\ \hline \\ \hline \end{array}$$

$$\begin{array}{r} \text{TH H T O} \\ 621 \\ + 743 \\ \hline \\ \hline \end{array}$$

Q10. Add the following.

- a) $450 + 99 =$ _____
- b) $515 + 99 =$ _____
- c) $75 + 9 =$ _____
- d) $264 + 9 =$ _____

Activity work according to Roll Numbers:

- Make a chart of Roman numbers using matchsticks on an A3 size sheet (Roll No. 1-15)
- Prepare a small booklet of multiplication tables (Roll NO. 16 to 31)

(Details: Use A4 size sheet. Fold into a booklet. Write table per page. Decorate the cover.)

हिंदी

कार्यपत्रिका- 1

भाग 1 – अपठित गद्यांश

सोनू एक मेहनती और अनुशासित छात्र है। वह प्रतिदिन प्रातःकाल उठकर अपने कार्य समय पर पूरा करता है। उसे पुस्तकें पढ़ने का बहुत शौक है। विद्यालय में वह ध्यानपूर्वक अध्यापक की बात सुनता है और सभी प्रश्नों के उत्तर देने का प्रयास करता है। छुट्टी के बाद वह अपने मित्रों के साथ खेलता भी है और घर आकर गृहकार्य पूरा करता है। उसके अच्छे व्यवहार के कारण शिक्षक और मित्र सभी उसकी प्रशंसा करते हैं।

प्रश्न:

1. सोनू किस प्रकार का छात्र है?

2. वह प्रातःकाल क्या करता है?

3. विद्यालय में सोनू क्या करता है?

4. सोनू की प्रशंसा क्यों होती है?

भाग 2 – व्याकरण

क) पर्यायवाची शब्द लिखिए

1. जल – _____ , _____

2. सूर्य – _____ , _____

3. चंद्रमा – _____ , _____

4. पृथ्वी – _____ , _____

5. वायु - _____ , _____

ख) विलोम शब्द लिखिए

1. भारी - _____

2. सरल - _____

3. उजाला - _____

4. लाभ - _____

5. कठोर - _____

ग) शब्दों से वाक्य बनाइए

1. विद्यालय -

2. पेड़ -


3. खेल -

4. पानी -

5. किताब -

भाग 3 - चित्र वर्णन

दिए गए चित्र को देखकर 6 पंक्तियाँ लिखिएः



1. _____
2. _____
3. _____
4. _____
5. _____
6. _____

हिंदी

कार्यपत्रिका - 2

भाग 1 – अपठित गद्यांश

गर्मी की छुट्टियों में मोहित अपने दादा-दादी के गाँव गया। गाँव का वातावरण बहुत शांत और स्वच्छ था। वहाँ चारों ओर हरे-भरे खेत और पेड़ दिखाई देते थे। मोहित रोज़ सुबह दादा जी के साथ खेतों में जाता था। दादा जी उसे फसलों और पशुओं के बारे में नई-नई बातें बताते थे। एक दिन मोहित ने देखा कि गाँव के बच्चे पेड़ों के नीचे बैठकर पढ़ाई कर रहे हैं। यह देखकर उसे बहुत अच्छा लगा। छुट्टियाँ समाप्त होने पर मोहित ने निश्चय किया कि वह अपने शहर में भी अधिक पेड़ लगाएगा और वातावरण को स्वच्छ बनाए रखने में मदद करेगा।

1. मोहित छुट्टियों में कहाँ गया था?

- | | |
|---------------|------------------|
| a) पहाड़ों पर | b) गाँव में |
| c) शहर में | d) समुद्र के पास |

2. गाँव का वातावरण कैसा था?

- | | |
|-------------------|---------|
| a) शोरगुल वाला | b) गंदा |
| c) शांत और स्वच्छ | d) छोटा |

हिंदी गतिविधियाँ (Creative Activities)

1. मेरा शब्दकोश (Mini Dictionary)

- एक छोटी कॉपी बनाएं:
- हिंदी पाठ्यपुस्तक (बसंत) के पाठ – 3,4,5,7,11 पढ़ें।
- सभी पाठों में से 10-10 कठिन शब्द छांटकर उनके अर्थ भी लिखें।

2. पर्यावरण गतिविधि

पर्यावरण दिवस पर एक पोस्टर बनाए और पांच पंक्तियां लिखें।

3. लेखन कार्य

सभी छात्रों को एक हिंदी की छोटी कॉपी में प्रतिदिन एक सुलेख करना है।

Worksheet 2

Q1. List the food items according to their category.

Unhealthy food

Healthy food

1. _____

2. _____

3. _____

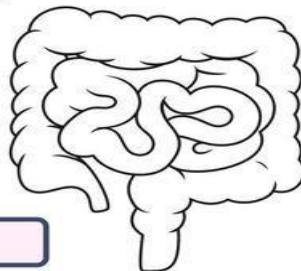
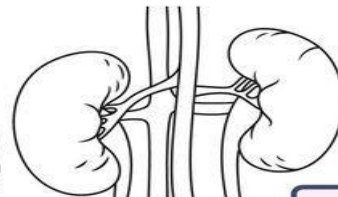
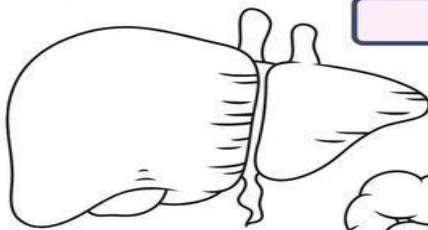
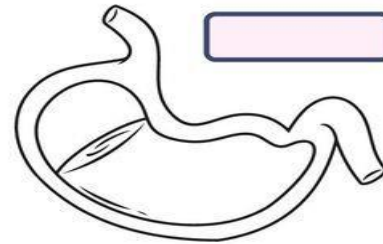
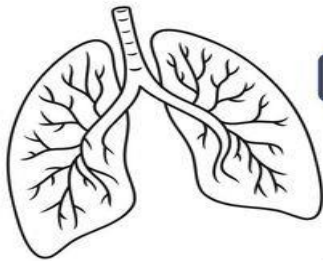
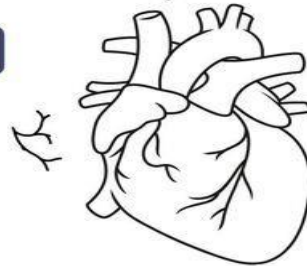
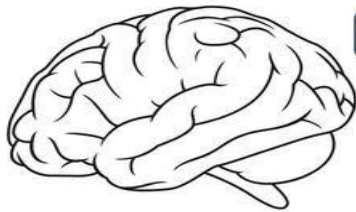
4. _____

5. _____

Q2.

INSIDE THE BODY

Identify and color the internal organs.



COMPUTER WORKSHEET – 2

Q-1 Write down the names of the keys used for the following.

1. To erase the character to the right of the cursor position. _____
2. To move the cursor to the next line. _____
3. To place the cursor at the end of the line. _____
4. To move the cursor to the top of the document. _____
5. To move the cursor or page down by one screen. _____

Q-2 Write T for True and F for False.

1. WordPad is a system software. _____
2. There are two Enter keys on the keyboard _____
3. A computer can take decisions _____
4. Computers can store limited data only. _____

Q-3 Match the following with their full form.

- | | |
|--------|-------------------------------|
| 1. CU | (a) Compact Disc |
| 2. VDU | (b) Memory unit |
| 3. CD | (c) Control unit |
| 4. MU | (d) Arithmetic and Logic unit |
| 5. ALU | (e) Visual Display unit |

Q-4 Unscramble the following words

1. W O D R _____
2. B B I R O N _____
3. N I U P T _____

Activity work

- Make a creative flow chart on 'types of computers' on an A3 size sheet (for roll number 1 to 15)
- Make a creative flow chart on 'parts of hardware' on an A3 size sheet (for roll number 16 to 31)

GK
Worksheet – 1

Section A: Folk Dances of India

Fill in the blanks with correct states of the following dance with the help of options:

(Options: Punjab, Gujarat, Uttar Pradesh, Assam, Rajasthan, Maharashtra)

1. Bhangra → _____
2. Garba → _____
3. Kathak → _____
4. Bihu → _____
5. Ghoomar → _____
6. Lavani → _____

Section B: Sports Icons

Identify the sport from the picture.

1. _____



2. _____



3. _____



4. _____



5. _____



Section C: Comic Characters

Name the character.

1 _____



2 _____



3 _____



4 _____



GK
Worksheet – 2

Q1 Write six lines about Prime minister of India.



1. _____
2. _____
3. _____
4. _____
5. _____
6. _____

Activity work (Work to be done in scrapbook)

News junction

- Cut and paste 15 simple news headlines
- Write 2–3 lines about each

Nature Time

- Paste picture of 5 plants
- Write 5 lines about each including their use

Drawing

Q1. Draw a poster on the famous festival from the state you belong.
(Eg: Bihar : Chatt Puja)

Q2. Make a pen stand or wall hanging from the best out of waste.



READING TIME



1. Shelly The Turtle



In a pond, there was a tiny turtle named Shelly.
All her siblings swam gracefully, but Shelly kept sinking.
She felt scared. "I'm too small," she worried.
A wise frog told her, "Every swimmer once couldn't float.
Your strength is building."
Shelly practiced every day. She paddled. ✨
She floated. She grew brave.
One day... WHOOSH!
She glided through the water like a leaf on wind.
Shelly became the fastest swimmer in the pond.



Moral -

Fear is just practice waiting to happen.
Don't compare your beginning to someone else's middle.
You are exactly where you need to be. 💙



2. The Shadow Flower

In a crowded garden, a small flower grew in shadow while others danced in sun.



"I'll never be as bright," it thought sadly.

A butterfly landed on it and said,

"You don't need sun to be beautiful.

You need to be yourself."

The flower stopped fighting the shade.

It leaned into its gentle light. One day... BLOOM!

Its delicate petals caught every fleck of light around it.

Birds came just to see this quiet, brave bloom.



Moral -

Your path doesn't look like anyone else's— and that's your superpower. Bloom where you're planted.

Different doesn't mean less. 🌸



3. The Tiny Raindrop

A tiny raindrop fell and felt lost
among millions on the ground.

"I'm just one. I don't matter," it whispered.

Another drop rolled beside it and said,



"Together, we become something big."

Drop by drop, they joined others.

They flowed. They grew. They never stopped moving.

One day... RUSH! That raindrop had become
part of a mighty river feeding an entire valley.



Moral –

You are one of a kind, but never alone.

Your small efforts create big change.

Keep flowing. 💧



4. The Silent Bird

A little bird woke up one morning and
couldn't remember her song. All the
other birds sang beautifully. She stayed silent. ✨
"I've forgotten," she cried. "I'll never sing again."
A kind sparrow said, "Songs aren't remembered—they're felt.
Your song is inside, waiting." The bird stopped trying
to remember. She just felt her heartbeat.
One day... CHIRP! Out came a song
entirely her own—different, but so true.



Moral –

You don't have to be perfect.
You have to be real.
Your authentic voice is your gift. 🎵





Computational Thinking

Questions

1. Find the largest number name that is hidden in the series given below.

Note: The letters in the number name should appear together as continuous letters

FORHLKJLTEMELVENDSKLFOURSDGSTWENTYSJLSIXTKSEVENL

- a) 60 b) 6 c) 20 d) 70

2. Roy's favourite number has:

- 3 letters in its name
- The number of vowels is double the number of consonants in its name

What is Roy's favourite number?

- a) 2 b) 6 c) 10 d) 1

3. If each of the given boxes follows the same theme, what will come in place of “?”



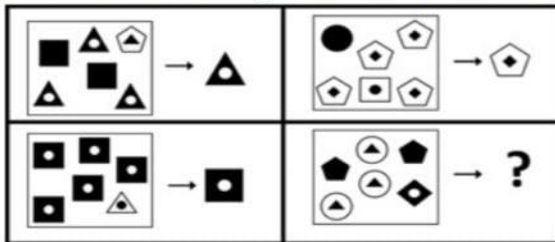
- a) NINE3 b) THREE9 c) THREE3 d) 9THREE

4. If each of the following terms follows the same theme, what will come in place of “?”



- a) b)
- c) d)

5. If each of the following terms follows the same theme, what will come in place of “?”



- a) b)
- c) d)

6. Find the odd one out.



7. Which of the following number names given in the options will come second if arranged in dictionary order of their names?

- a) 5 b) 6 c) 8 d) 9

8. Each shape has a letter in it. Spelling (or Name) of which of the following numbers, given in the options can be formed by combining the letters in the circles only?



- a) 1 b) 5 c) 9 d) 6

9. Spelling of which of the following numbers given in the options is present in the group of letters given below?

Note: The letters of the name should appear in the same order as in the word

TWLVETOWELEVENSVENTHREEIFEIHGT

- a) 2 b) 7 c) 3 d) 8

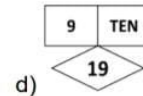
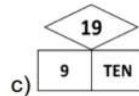
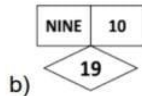
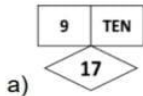
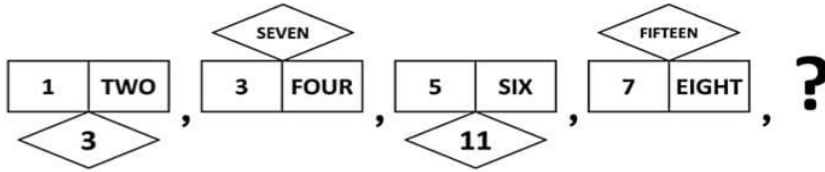
10. Which of the following numbers CANNOT be spelt using the letters present in the image given below?

Note: If a letter appears in the image, it can be repeatedly used any number of times to spell the number name



- a) 50 b) 30 c) 85 d) 11

11. What will come in place of "?" in the given series?



12. If you were to write the numbers given below in words, spelling of which of them would have exactly one vowel in it?

a) 1

b) 2

c) 5

d) 9

13. X is a single digit number. If X has exactly five letters in its spelling, how many different values can X possibly have?

Note: If a letter is repeated in the spelling of X, it has to be counted as many times as it appears in the spelling. For example, the word "NINE" has 4 letters and not 3 letters

a) 1

b) 2

c) 3

d) 4



The Thinking Spot

Raj, Aryan, and Rahul went to a movie on different days.
Raj did not go to the movie on Monday, Wednesday, or Thursday.
Aryan went to the movie on Friday, and Rahul went to the movie on Sunday.
Which of the following days could Raj have gone to the movie?

(a) Thursday

(b) Tuesday

(c) Saturday

(d) Either Tuesday or Saturday



5. What will come in place of "?"



- a) b) c) d)

6. If you remove all the numbers greater than 5 from row 1, all the numbers less than 4 from row 2, and all the numbers greater than 7 from row 3, then which row will have the largest count of numbers remaining?

Row 1	8	4	1	7	2	6
Row 2	5	2	7	0	3	1
Row 3	4	6	8	9	5	1

- a) Row 1 b) Row 2
c) Row 3 d) Both rows 1 and 3 have equal numbers

7. Given below is a game board of snakes and ladders. Which ladder is most beneficial?



- a) Black b) Blue c) Red d) Green

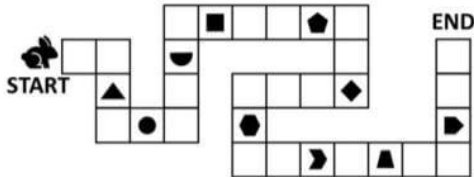
8. In the image given below, what is the maximum number of dots that can be connected by drawing a single straight line?



- a) 3 b) 4 c) 5 d) 6

9. The rabbit has to reach the end of the path by stepping on EACH block WITHOUT skipping any blocks in between. It collects an item from every 5th block it steps on. Which of the following objects did it NOT collect?

Note: The rabbit can step on a block exactly once



- a)  b)  c)  d) 

10. Altogether, 25 coins are to be arranged in different stacks in such a way that each stack has one more coin than the previous stack. If the last stack has 7 coins, how many such stacks will be required so that no coins are left?

- a) 4 b) 5 c) 6 d) 7



The Thinking Spot

My 4-digit phone passcode is made using only odd numbers, and no number is used more than once. 3 is the smallest digit in the code, and is also the last digit of the code. The largest digit and the smallest digit of the code have only one digit in between them.

What is the hundred's digit (2nd digit from the left) of my phone pass code?

Note: None of the digits in the pass code are repeated. Each digit appears only once

- (a) 7
(b) 5
(c) 9
(d) Either option a or c



INTERNATIONAL YOGA DAY 2026

Theme: Yoga for Wellness, Wisdom, and World Peace

Dear Students,

Please do yoga every day for at least 5-10 minutes to stay healthy and active.

And two days before International Yoga Day (21 June 2026), share a photo or video of yourself performing any one yoga pose with your class teacher. Along with the photo or video, mention:

Name of the yoga pose

Benefits of that pose

Stay fit and enjoy yoga!

1. Tree Pose

(Vrikshasana – One of the best yoga poses for balance & focus)



Benefits


- 1. Improves Balance & Body Awareness
- 2. Boosts Focus & Concentration
- 3. Strengthens Leg & Core Muscles
- 4. Improves Posture

✓ **Beginner (3-4 years)**
10-15 seconds per side
→ They can repeat 2 times.
Keep it playful and short.

✓ **Ages 5-6 years**
20-30 seconds per side
→ Repeat 2-3 times.

✓ **Ages 7+ years**
30-45 seconds per side
→ Repeat 2-3 times.

2. Dog Pose



Benefits


- 1. Strengthens Arms, Shoulders & Core
- 2. Stretches the Whole Body
- 3. Improves Blood Flow to the Brain
- 4. Calms the Nervous System.

★ **Ages 3-5:**
5-10 seconds → Repeat 2-3 times.

★ **Ages 6-8:**
10-20 seconds → Repeat 2-3 times.

★ **Ages 9+:**
20-30 seconds → Repeat 2-3 times.

3. Triangle Pose



Benefits


- 1. Improves Flexibility
- 2. Strengthens Core & Legs
- 3. Boosts Body Awareness & Coordination
- 4. Enhances Focus & Calm Breathing

✓ **Ages 3-5**
10-15 seconds per side
Repeat 1-2 times.

✓ **Ages 6-8**
20-30 seconds per side
Repeat 2 times.

✓ **Ages 9+**
30-40 seconds per side
Repeat 2 times.

4. Warrior Pose



Benefits

- 1. Builds Strong Legs & Core
- 2. Improves Focus & Confidence
- 3. Enhances Balance & Stability
- 4. Boosts Energy & Reduces Stress

✓ **Ages 3-4:**
10-15 seconds per side → Repeat 2 times

✓ **Ages 5-6:**
20 seconds per side → Repeat 2-3 times

✓ **Ages 7+:**
20-30 seconds per side → Repeat 2-3 times

5. Cow Pose



Benefits

- 1. Supports Calm Breathing
- 2. Boosts Focus & Body Awareness
- 3. Improves Flexibility
- 4. Strengthens Back & Core Muscles

✓ **Ages 3-6 years**
8-10 repetitions
(Each movement matching a slow inhale & exhale)

✓ **Ages 7+**
10-12 repetitions
With controlled breathing.

★ **Total time needed: 1-2 minutes only.**