

**Winter Break
Holidays
Homework
Class: IV
Session:2025-26**



STUDENT'S NAME

FATHER'S NAME

CLASS & SECTION

ROLL NO.

हिंदी शीतकालीन अवकाश गृहकार्य

प्रश्न 1 प्रोजेक्ट वर्क:

A3 शीट पर वाक्य और उसके अंगों (उद्देश्य और विधेय) का नाम उदाहरण सहित लिखिए। (रोल नंबर 1 से 12 तक)

A3 सीट पर काल तथा उसके भेदों का नाम उदाहरण सहित लिखिए। (रोल नंबर 13 से 24 तक)

A3 साइज शीट पर विराम चिन्हों के प्रकार का नाम तथा उसके चिह्नन बनाए। (रोल नंबर 25 से 36 तक)

प्रश्न 2 दी गई दोनों वर्कशीट हल कीजिए।

वर्कशीट-1

प्रश्न-1) वचन बदलकर वाक्य फिर से लिखिए-

1) रावण का पुतला जलाया जाता है।

2) पुस्तक पढ़ने में मजा आता है।

3) वह छात्र बहुत होशियार है।

प्रश्न-2) निम्नलिखित शब्दों के सामने लिंग के भेद का नाम लिखिए-

1) अध्यापक _____

2) हिमालय _____

3) कटोरी _____

4) पहाड़ी _____

प्रश्न-3) मिलान कीजिए-

विशेष्य


विशेषण



भूरा, शक्तिशाली



परिश्रमी, ईमानदार,



ऊंचा, सुंदर

प्रश्न-4) नीचे दिए गए विराम चिह्ननों का प्रयोग करते हुए एक वाक्य लिखिए -

1) पूर्ण विराम (।)

2) प्रश्नवाचक (?)

3) अल्प विराम (,)

4) विस्मयबोधक (!)

प्रश्न-5) दिए गए वाक्यों को शुद्ध करके लिखिए-

1) मेरे को अपना खिलौना देकर जाना।

2) जिया फूट-फूट कर चिल्ला रही थी।

3) पुस्तक में नहीं लिख।

प्रश्न-6) नीचे दिए गए शब्दों का प्रयोग करके सार्थक वाक्य बनाइए-

1) खिलाड़ी: _____

2) खेलकूद: _____

3) महान : _____

4) घूमना : _____

हिंदी वर्कशीट-2

प्रश्न -1) निम्नलिखित मुहावरों का अर्थ लिखिए-

1) गले का हार - _____

2) चकमा देना - _____

3) खून पसीना एक करना- _____

प्रश्न-2) दिए गए शब्दों के दो-दो पर्यायवाची शब्द लिखिए-

1) नदी - _____ , _____

2) तालाब - _____ , _____

3) माता - _____ , _____

प्रश्न-3) निम्नलिखित शब्दों के विलोम शब्द लिखिए-

1) मधुर - _____

2) मानव - _____

3) सत्य - _____

प्रश्न-4) वाक्यांशों का उनके एक शब्द से मिलान कीजिए-

1) जो ईश्वर को न मानता हो जलचर

2) जो काम मास में एक बार हो मासिक

3) जो जल में रहता है आस्तिक

प्रश्न-5) गद्यांश के आधार पर निम्नलिखित प्रश्नों के उत्तर दीजिए:

प्राचीन काल में, एक प्रतापी राजा था जिसका नाम विक्रमादित्य था। वह अपनी बुद्धिमत्ता और न्यायप्रियता के लिए दूर-दूर तक प्रसिद्ध था। उसकी प्रजा सुखी और समृद्ध थी क्योंकि राजा हमेशा उनके कल्याण के बारे में सोचता था। राजा का मुख्य कर्तव्य अपनी प्रजा की रक्षा करना और राज्य में शांति बनाए रखना था। वह विद्वानों और ऋषियों का बहुत सम्मान करता था और अक्सर उनसे राज्य के मामलों में सलाह लेता था। एक बार, पड़ोसी राज्य के राजा ने विक्रमादित्य की परीक्षा लेने के लिए एक जटिल पहेली भेजी। विक्रमादित्य ने बिना किसी देरी के उस पहेली को सुलझा दिया, जिससे उसकी ख्याति और भी बढ़ गई।

प्रश्न राजा का क्या नाम था।?

उत्तर: _____

प्रश्न प्रजा के सुखी होने का क्या कारण था?

उत्तर: _____

प्रश्न राजा विक्रमादित्य किन लोगों का सम्मान करता था?

उत्तर: _____

★ SUBJECT : MATHS

QUESTIONS FROM MEASUREMENT AND CLOCK

Name and roll no. _____

Class/Section: _____

WORKSHEET-1

***Make a project on the following topics.**

***Roll no 1 to 10-** Make a model on 24 hour clock with the help of given video.
***Roll no 11 to 20-** Make a model on time measurement chart with the help of given video.

***Roll number 21 to 30-** make a measurement model with the help of a given video.

***Roll no 31 onwards-** Measure at least 10 home appliances of your home, paste their picture and write their measurement on A3 sheet.

Measurement.

a) 5 kg = _____ g

b) 3000 g = _____ kg

Q2. Add:

2 m 45 cm + 1 m 30 cm = _____

Q3. Subtract:

6 L 250 mL – 2 L 750 mL = _____

*** Clock / Time**

Q1. Write the time in 24 hour clock.

a) 3:15 is called _____

b) 6:30 is called _____

Q2. Convert the following:

a) 2 hours = _____ minutes

b) 180 minutes = _____ hours

Q3. A school starts at 9:00 a.m. and ends at 2:30 p.m.

How long does the school work for? _____

Q4. Draw a clock  and show time:3:25.

WORKSHEET-2

*Worksheet based on addition subtraction multiplication and division

QA. Add the following (Column Method)

1. $245 + 134 =$ _____

2. $368 + 217 =$ _____

3. $409 + 186 =$ _____

Q2. Subtract the following (Column method)

1. $654 - 321 =$ _____

2. $800 - 456 =$ _____

3. $742 - 289 =$ _____

Q3. Multiply:

1. $124 \times 367 =$ _____

2. $2315 \times 47 =$ _____

3. $3036 \times 509 =$ _____

Q4. Divide (Write quotient and remainder.)

1. $245 \div 15 =$ _____

2. $368 \div 40 =$ _____

★ SUBJECT -ENGLISH

★ Solve the given worksheet in neat handwriting.



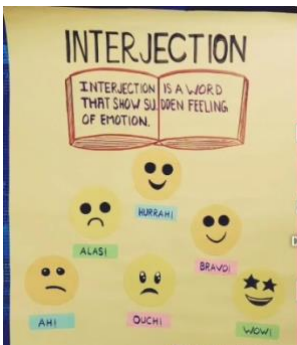
Make project according to your roll number on A4 size sheet

★ (Roll number 1 to 10) Make a project on topic punctuation.

★ (Roll number 11 to 20) Make a project on topic interjection.

★ (Roll number 21 onwards) Make a project on present continuous tense, past continuous tense and future continuous tense.

You can take help from the given images



☆ Punctuation Worksheet – Class 4 ☆

A. Insert Full Stops (.) and Question Marks (?) where needed.

1. Where do you live
2. My mother is a teacher
3. What is your favourite game
4. I am going to school
5. Why are you late

B. Rewrite the sentences using capital letters and correct punctuation.

1. my name is ritu
2. we live in delhi
3. when will you come
4. is this your pencil
5. sita and gita are sisters

C. Put commas (,) in the correct places.

1. I bought apples bananas grapes and mangoes.
2. My friends are Riya Meera Saanvi and Kiran.
3. We saw lions tigers bears and elephants in the zoo.
4. The flag is orange white and green.
5. I like cricket football and badminton.

D. Add the correct punctuation (!, ?, .)

1. Hurrah we won the match
2. Please help me
3. What is your name
4. Stop
5. This is my new school

E. Rewrite using proper punctuation (Sentences).

1. can you give me a pen
2. wow what a beautiful dress
3. my father works in a bank

☆ Interjections Worksheet – Class 4 ☆

A. Fill in the blanks with a suitable interjection.

(oh!, wow!, hooray!, alas!, ouch!, hey!, ah! — use any suitable one)

1. _____ I forgot my homework!
2. _____ I hurt my knee.
3. _____ We won the match!
4. _____ What a beautiful dress!
5. _____ The vase has broken.

B. Circle the interjection in each sentence.

1. Wow, this painting is amazing.
2. Ouch, The pin pricked my finger.
3. Hooray, our team scored a goal!
4. Oops, I dropped the glass.
5. Oh no, I missed the bus.

C. Rewrite the sentences by adding a suitable interjection at the beginning.

1. I lost my pencil.
2. We are going on a picnic.
3. I forgot to lock the door.
4. My brother brought me chocolates.

SUBJECT - S.S.T

Project Work

Make a project according to the roll no. on the following topics on a A-3 size sheet.

★ Different types of Food crops grown in India (Roll No. 1 to 5)

★ Different types of Cash crops grown in India (Roll No. 6 to 10)

★ Fundamental Rights (Roll No. 11 to 25)

★ Fundamental Duties (Roll No. 25 to 35)

WORKSHEET - 1 (Ch - 10 Agriculture in India)

Q1. Multiple Choice Questions:-

1. Which of the following is a food crop?

- a) Cotton b) Rice c) Jute

2. Which crop is called the 'king of fibres'?

- a) Jute b) Cotton c) Tea

3. Tea is mainly grown in:

- a) Rajasthan b) Assam c) Punjab

4. Which crop is called 'golden fiber'?

- a) Cotton b) Coffee c) Jute

Q2. Fill in the Blanks:-

1. The practice of growing crops is called _____.

2. India is an _____ country.

3. Rice is a _____ crop.

4. Wheat is a _____ crop.

5. Crops grown for commercial purpose are called _____.

Q3. Match the Following:-

1. Rice a) Rich in proteins

2. Wheat b) Kharif crop

3. Pulses c) Rabi crop

4. Sugarcane d) Used to make sugar

Q4. Answer the following questions:-

1. Name any two cash crops and two food crops of India.

WORKSHEET-2

Q1. Multiple Choice Questions:-

1. Goat's milk is

- a) harmful b) nutritious c) poisonous

2. A poultry farm is a place where

- a) cows are kept b) birds are kept c) fish are kept

3. Leather is made from

- a) wool b) hides c) milk

4. The Blue Revolution is related to

- a) milk b) fish c) leather

Q2. Fill in the blanks:-

1. Animals that are raised for food and other products are called _____.

2. The rearing and breeding of fish is known as _____.

3. We get milk from cows, buffaloes and _____.

4. Raw animal skins are called _____.

5. Poultry farms give us _____ and _____.

Q3. Match the following:-

1. Wool a) Fish farming

2. Poultry b) Bags

3. Pisciculture c) Eggs and meat

4. Leather d) Sheep

Q4. Answer the following questions:-

1. What is livestock?

2. Name any two products we get from animals.

SUBJECT : SCIENCE

★ Project should be made on A -4 Size sheets .

★ Project should be neat and submitted on time .

★ Topics :-

- Roll no.(1 to 10) Students will prepare the project on the Solar system .
- Roll no. (11 to 20) Students will prepare the project on Conservation of forests.
- Roll no. (21 to 30 and so on) Student will prepare the project on Sources of Energy .

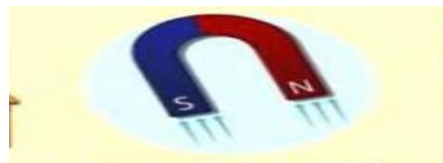
A . Give one word answer :-

1. A device that helps us to do work with less effort _____.
2. The force applied by muscles . _____
3. Energy obtained from the Sun . _____
4. The force exerted by a magnet . _____
5. The capacity to do work . _____

B. Fill in the blanks :-

1. Friction is more on a _____ surface than on a _____ surface .
2. _____ is done when you move something .
3. _____ force prevents one object from moving across the surface of another objects .
4. _____ force pulls objects toward the Earth .
5. Moving air and water are used to generate _____.

C. Identify the type of force in the following pictures .



Worksheet -2

Ques-1 Fill in the blanks :-


1. Hot air is _____ than cold air .

2. _____ changes liquid to gaseous state .
3. The amount of water vapour present in the air is called _____.
4. Strong winds and rain together cause a _____.
5. The condition of the air surrounding us at a particular time _____.

Ques-2 State whether the given statements are True (T) or False (F) .

1. Wind causes a cooling effect on the skin ()
2. Hot air always rises up . ()
3. Wet clothes dry faster on a cloudy day . ()
4. Weather affects our choice of activities . ()
5. The earth causes movement of hot and cold air . ()

Ques-3 Complete the water cycle diagram and Define the Water Cycle and Precipitation.



★ GENERAL KNOWLEDGE

*Chapter 28- The Cutting and Grinding Machine-fill chapter in your book take help from science book chapter 3 Digestion and Role of Microbes.

* Chapter 37- The Missing Music-Draw different type of musical instrument which are missing in the pictures.

*Chapter 55-IQ Test- 4 solve in book.

★ COMPUTER

Worksheet – Advantages & Disadvantages of the Internet

A. Fill in the Blanks

1. The Internet helps us to find _____.
2. We can talk to our friends on the Internet using _____ call.
3. Too much use of the Internet can harm our _____.
4. The Internet can cause _____ of time.

B. Write 'A' for Advantage and 'D' for Disadvantage

1. We can learn new things online. _____
2. We can become addicted to using the Internet. _____
3. We can send emails quickly. _____
4. We may meet strangers online. _____

C. Match the Following

Column A

Column B

- | | |
|--------------------|----------------------------------|
| 1. Online classes | a. Wasting too much time |
| 2. Video chat | b. Learning from home |
| 3. Addiction | c. Buying things on the Internet |
| 4. Online shopping | d. Seeing your friends live |

D. True or False

- a. The Internet helps to send information fast. ____
- b. We should share our passwords with everyone. ____
- c. Spending too much time online is harmful. ____
- d. The Internet can be used to play games. ____

DRAWING

 You have to make a beautiful picture on disposal plate and colour it .

Easy Steps

1) Take a clean disposable plate.

Wipe it gently to remove dust or grease.

2) Draw your design

Use a pencil to lightly sketch a simple design:

Flowers 

Butterfly 

Scenery 

Warty art 🌳

Mandala art ✨

Keep the design big and simple so it's easy to colour.

3) Colour the design

👉 Use poster colours or acrylic colours.

👉 Fill colours carefully inside the lines.

👉 Use bright, attractive colours.

4) Add details

You can add dots, small patterns, or lines to make it look more beautiful.

Let it dry completely.