




B.M. BHARTI MODEL SCHOOL

(A Senior Secondary School)
(Recognized and Affiliated to CBSE)
Majri, Delhi - 110081

WINTER BREAK HOMEWORK SESSION : 2024 - 25



CLASS & SECTION : III - D

STUDENT'S NAME : Kanishka

FATHER'S NAME : Bhim Singh

ROLL NO. : 10





B.M. BHARTI MODEL SCHOOL

(A Senior Secondary School)
(Recognised and Affiliated to CBSE)
Majri, Delhi - 110081

WINTER VACATIONS HOMEWORK SESSION 2024-25

HINDI

आप सर्दियों की छुट्टियों में क्या करते हैं पाँच पंक्तियाँ लिखिये। नववर्ष की शुभकामनाएँ देते हुए अपने मित्र के लिए एक कार्ड बनाए।

दी गयी कार्य पत्रिका को हल कीजिए।

ENGLISH

Make 5 flash cards of homophones with pictures.

Write five ways to conservation of trees.

Solve the given worksheets.

EVS

Draw any four different types of houses on A3 size sheet.

Find out the names of five newspaper read in your locality and write their names on A4 size sheet.

Solve the given worksheets.

MATHS

Make a clock with the help of a paper plate.

Draw and write the names of different vessels holding less than 1litre and more than 1 litre on an A-4 size sheet

- Solve the given worksheets.

B.M.BHARTI MODEL SCHOOL

(Senior Secondary School)
(Recognised and Affiliated to CBSE)
Majri, Delhi - 110081

Ph. No. : 9899507287



Website : www.bmbhartischool.com
bmbhartimdl@gmail.com

Email ID :

STUDENT'S NAME- _____

CLASS & SECTION - _____

Winter Break (Holidays Home work 2024-25)

SUBJECT- हिन्दी

worksheet-1 व्याकरण

प्रश्न 1. नीचे दिए गए शब्दों को बहुवचन में बदलकर लिखिए ।


1) बालक _____

2) मोर _____

2) देव _____

3) माली _____

प्रश्न 2. दिए गए संज्ञा शब्दों के आगे उचित विशेषण शब्द लिखिए।



2)

_____ गुलाब जामुन

_____ इमली

प्रश्न 3. चित्र को देखकर तीन पंक्तियों में उसका वर्णन कीजिए ।



प्रश्न 4. क्रिया शब्दों को रेखांकित कीजिए ।

1. पक्षी उड़ रहे हैं ।
2. अनुज और ऋषभ खेल रहे हैं।
3. मेघा दूध पी रही है।
4. आलिया किताब पढ़ रही है।

worksheet-2(रंगोली)

प्रश्न 1 पाठ की सहायता से मसूरी के बारे में चार वाक्य लिखो।

प्रश्न 2 निम्नलिखित प्रश्नों के उत्तर दीजिए।

1. पहाड़ों की रानी किसे कहा जाता है?

2. हमारे देश में स्वच्छता अभियान कब प्रारंभ हुआ था?

3. टाइटेनिक क्या था?

प्रश्न 3. नववर्ष की शुभकामनाएँ देते हुए अपने मित्र के लिए एक कार्ड बनाए।

प्रश्न 4. हिंदी की कॉपी में कराया गया कार्य याद कीजिए।

English worksheet-1

Q1. Read the given paragraph and answer the questions-

Lily was a little girl who loved flowers. She had a small garden in front of her house where she grew many colorful flowers. Every morning, Lily would water her flowers and talk to them. She believed that talking to flowers made them happy and helped them grow. One day, while watering her garden, Lily noticed a tiny seed on the ground. She picked it up and planted it in her garden. Every day, she took special care of the seed, watering it and giving it plenty of sunshine.

After a few weeks, the seed grew into a beautiful sunflower. Lily was so excited! The sunflower was tall and bright, and it made her garden look even more beautiful.

Answer the following questions :

Q1. What did Lily love?

a) Animals

b) Flowers

c) Trees

Q2. Where did Lily have her garden?

a) In front of her house

b) In her backyard

c) On the roof

Q3. What did Lily find on the ground one day?

a) A flower

b) A leaf

c) A tiny seed

Q4. What did the seed grow into?

a) A rose

b) A sunflower

c) A tulip

Q2. Fill in the blanks with the adverbs.

slowly; fluently; neatly

1. Natasha does her work _____



2. The old man walked _____



3. The birds chirped _____



Q3. Write the homophones of :

1. Principal _____

2. Cell _____

3. Own _____

4. Right _____

5. Sun _____

English worksheet-2

Q1. Circle the prepositions in these sentences:

1. Do not write with your pen.
2. The clock is between the window and the painting.
3. The man is near the car.
4. The fan is over the boy's head.
5. The shoes are on the bed.

Q2. Underline the adverbs in these sentences:

1. The dog is barking loudly.
2. The sun is shining brightly.

3. Manoj is sitting here.

4. The aeroplane is flying there.






Q3. Fill in the blanks with simple past tense.


1. We _____ at the door twice. (knock/knocked)
2. The children _____ their books. (open/opened)
3. Sunil _____ the ball into the goal. (kick/kicked)
4. I _____ the answer in my notebook. (Write/wrote)
5. I _____ the correct answer. (give/gave)

Maths worksheet-1

Q1. Jack recorded the number of pizzas sold over 5 days.

Read the chart and answer the questions-

Day	No. of pizzas sold
Monday	
Tuesday	
Wednesday	
Thursday	
Friday	

 = 5 pizzas

Q1. How many pizzas did he sell on Thursday?

-> _____

Q2. Which day did he sell the least pizzas?

-> _____

Q3. Which day did he sell the most pizzas?

-> _____

Q4. Which day did he sell 25 pizzas?

-> _____

Q5. How many pizzas did he sell on Monday and Wednesday

-> _____

Q6. How many less pizzas were sold on Friday than Thursday

-> _____

Q2. Subtract the following-

1. Rs	p	2. Rs	p
39	78	97	58
-16	45	-77	23

Maths worksheet-2





Q1. Add the following -

1. Rs. 45 + 30	2. Rs. 69 + 98
p 50 20	p 74 43
3. Rs. 74 + 96	4. Rs. 10 + 70
p 60 10	p 00 00

Q2. Fill in the blanks

- A. 1 hour = _____ minutes.
- B. 1 minute = _____ seconds.
- C. 1 day = _____ hours.
- D. 1 month = _____ days.
- E. Leap year = _____ days.
- F. 1 year = _____ months.
- G. 1 year = _____ days.

Q3. Add the money each person has and then match with the currency.

 Rs.72	
 Rs.281	


Subject - EVS
Worksheet-1

Q1. Tick the correct option-

1. We can find houseboats in-
A. Kashmir() B. Rajasthan() C. Gujarat()
2. An atlas is a book of-
A. Stories() B. Poems() C. Maps()
3. The sun rises in the-
A. West() B. East() C. North()
4. A house provides us shelter from-
A. rain() B. heat() C. both A and B()
5. Which of these are used in Diwali?
A. Diyas() B. kullhads() C. matkas()

Q2. Tell the state of India in which you see these houses


1. with thick stone walls and flat roofs.



2. Made of slopping roofs and built on stilts.



3. On the top trees.



Q3. Cross the odd one out-

- | | | | |
|---------|-------------|------------|------------|
| Horse | Donkey. | Scooter. | Bullock |
| Car. | Aeroplane. | Bus. | Truck |
| Rocket. | Motorcycle. | Aeroplane. | Helicopter |

Worksheet-2

Q1. Name it-

- 1. It helps us to reach our destination. _____
- 2. It shows detail of places. _____
- 3. It has a needle to show directions. _____

Q2. What materials are used to build a house?

- 1. _____
- 2. _____
- 3. _____
- 4. _____
- 5. _____

Q3. Draw one-one picture of each of them-

Land transport

Water transport

Air transport