



B.M. BHARTI MODEL SCHOOL

(Senior Secondary School)

(Recognised and Affiliated to CBSE) Majri, Delhi - 110081

Ph. No. : 9899507287

Email Id - hmbhartimdl@gmail.com

Website-www.bmbhartischool.com

SUMMER HOLIDAYS HOME WORK

SESSION 2024-25

CLASS - I

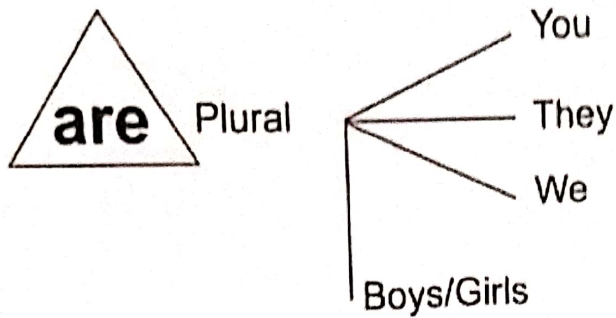

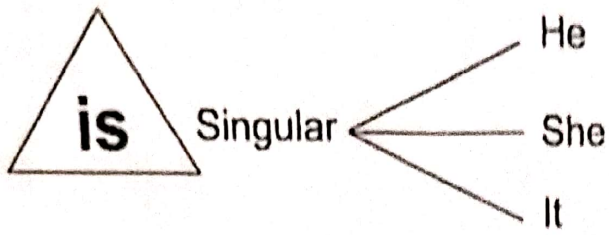
DEAR PARENTS,
HOLIDAYS BRING THE DELIGHT TO STUDENTS BECAUSE THEY PROVIDE RECREATIONS AND REST. ALL STUDENTS EAGERLY WAIT FOR HOLIDAYS .SO HOLIDAYS ARE VERY IMPORTANT & LET'S MAKE THESE HOLIDAYS SPECIAL WITH LOTS OF JOY AND GOOD HEALTH. AN ACTIVITY CALENDER FOR THE MONTH OF JUNE IS PREPARED BY YOUR WARD'S TEACHERS TO MAKE HIS/HER HOLIDAYS MORE CREATIVE, KNOWLEDGEABLE AND FOR ALL-ROUND DEVELOPMENT OF CHILD. WE REQUESTED YOU TO SUPPORT YOUR WARD TO COMPLETE THESE RECREATIVE ACTIVITIES ENTHUSIASTICALLY.

- ENCOURAGE YOUR CHILD TO MAKE THE SURROUNDINGS NEAT, CLEAN AND GREEN.
- EAT HEALTHY FOOD.
- DO 20 MINUTES YOGA/DANCE/RUNNING AT HOME UNDER YOUR PARENTS SUPERVISION. (MORNING/EVENING)
- TRAIN YOUR CHILD TO GET UP EARLY AND TELL THEM TO WISH YOUR PARENTS.
- CLICK PICTURES OF YOUR WARD WHILE THEY PERFORM THE GIVEN ACTIVITIES AND SEND IT TO THEIR CLASS TEACHERS.
- DON'T TAKE THESE ACTIVITIES AS BURDEN BUT ENJOY THEM AND GIVE YOUR BEST.
- ENJOY YOUR HOLIDAYS. STAY SAFE AND HEALTHY.



SUMMER HOLIDAYS HOMEWORK
CLASS- I

ENGLISH	<ul style="list-style-type: none"> ➤ Learn the prayer 'WE SHALL OVER COME' and sing it on mic and share a recorded 90 seconds video with your class teacher. ➤ Write any 5 beautiful cursive writing in 3 in one notebook. ➤ Write any five- five describing words for your Mother, Father and Sibling on an A4 size colorful sheet.
MATHEMATICS	<ul style="list-style-type: none"> ➤ Write and learn the spellings of Number Names upto 100 consisting the numbers 1,2,3,4,5,6,7,8,9,10,11,12,13,14,15,16,17,18,19,20, 30,40,50,60,70,80,90,100. (At least 5 times in holidays homework 3 in one notebook) ➤ Make a beautiful collage of 2D shapes like CIRCLE, TRIANGLE, SQUARE, RECTANGLE, CYLINDER, CONE & STAR on an A3 size colorful sheet and give these shapes a beautiful outline by using pulses and grains. ➤ Learn and write tables from 2 to 10 in 3 in 1 notebook. (At least 5 times)
E.V.S	<ul style="list-style-type: none"> ➤ Make a family tree on A3 size sheet by hand printing of each family member. ➤ Draw a picture of human body and label the different external body parts on A3 size sheet. ➤ Make a beautiful collage of different means of transport, roll number wise consisting of at least any six pictures. Roll Number – 1-12 (Air) Roll Number – 13-24 (Water) Roll Number – 25-36 and onwards (Land)
DRAWING	<ul style="list-style-type: none"> ➤ Draw any 5 vegetables/Fruits on A3 size sheet. ➤ ➤ Make a face mask of any Birds/Animals.
G.K	<ul style="list-style-type: none"> ➤ Paste the pictures of worship places on A4 size sheet (Book page no. 6) ➤ Make any one 3D model of means of transport (car, bus, cycle etc.) ➤ ➤ Learn all the work done in notebook.
HINDI	<ul style="list-style-type: none"> ➤ दो-तीन व चार अक्षर के 10-10 शब्दों को कॉपी में लिखो व उनसे संबंधित चित्रों को कॉपी में चिपकाए व बनाइए ➤ आ की मात्रा के 10 10 शब्दों को कॉपी में लिखो व उनसे संबंधित चित्र कॉपी में बनाओ व चिपकाइए। ➤ दस सुलेख कॉपी में लिखो। ➤ 'आम' का सुन्दर सा चित्र बनाओ व उसकी पांच विशेषताएं A-3 साइज शीट पर लिखो ।



Fill in the blanks with is/am/are

- (a) She _____ my sister.
- (b) He _____ writing.
- (c) It _____ raining.
- (d) The wind _____ blowing.
- (e) They _____ coming today.
- (f) They _____ boys.
- (g) I _____ a player.
- (h) You _____ a good player.
- (i) The girls _____ singing.
- (j) Arun _____ a sincere boy.
- (k) This book _____ not available in the market.
- (l) The birds _____ chirping.
- (m) I _____ going to school.
- (n) He _____ a serious student.
- (o) You _____ a great singer.





Doing Words

DATE :

Some doing words are given in the box. Put each one into the suitable space below.

walks shines march climbs shower drives gallops brings




The Sun in the sky.



A of rain.



The man on the road.




The horse down the road.



The driver a car.



The postman the letters.



The soldiers along the road.



The monkey up the tree.




Antonyms and Synonyms

DATE :

Match the antonyms (words with opposite meanings).



hot



sour



sweet



old



straight



night



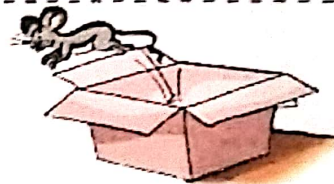
young



light



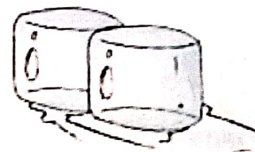
heavy



outside



inside



cold



throw



catch



day



curly

एक-अनेक (वचन)

दिनांक :

वस्तुओं को गिनकर लिखिए-


एक लड़का




....चार लड़के....




एक पेड़




एक प्याला













एक बकरी



एक तितली



1. सही मिलान कीजिए-

	राजा	चुहिया	
	चूहा	शेरनी	
	मोर	रानी	
	बूढ़ा	मोरनी	
	शेर	बुढ़िया	

2. लिंग बदलिए-

मामा -	मामी	लेखक -
भाई -	मुर्गी -	दासी -
बकरा -	बच्चा -	
स्त्री -		



विलोम और समान अर्थ वाले शब्द

दिनांक :

1. उलटे अर्थ बताने वाले शब्द लिखिए-




बिल्ली अंदर चूहाबाहर.....



मीठा आम नींबू



अमीर आदमी आदमी



साफ़ पानी पानी

2. समान अर्थ वाले शब्द लिखिए-

आकाश आसमान

फूल

हवा

सूर्य

सुबह

धरती

What am I?

1. I am round. You play with me.

B a l l

2. I am a fruit. I am long and yellow.

B

3. My mother is a cat.

K

4. I am a sweet. Bees make me.

H

5. You carry me to school. You put your books in me.

B

6. I have four wheels. You can sit in me. C

C

7. I shine in the sky at night.

M

8. I live in water.

F

9. I live on the tree. I chatter.

M

10. I am an animal. I give you wool.

S

11. I am a number. I come after six.

S

12. I am snow man.

E

Date :



Teacher's Signature

Look at the picture carefully. Write five sentences about what you can see :



1. _____
2. _____
3. _____
4. _____
5. _____



Orders (Ascending and Descending order)

DATE :

Arrange the given numbers in ascending order.

5	56	42	78	55	5	42	55	56	78
83	6	77	86	41					
44	52	81	38	86					
6	54	35	75	58					
43	81	8	74	36					
55	43	50	33	71					

Arrange the given numbers in descending order.

9	46	59	30	61	61	59	46	30	9
59	63	9	51	28					
64	24	61	12	63					
14	49	63	69	24					
46	70	17	49	69					
66	47	72	20	68					

Solve the following:

There are 4 boys and 3 girls in a joint family.
How many children are there in all?

Answer: Children.

+ _____

Rahul had 6 pencils. His father gave him 3
more pencils. How many pencils does Rahul
has now?

Answer: Pencils.

+ _____

Shefali has 6 coins. Madhu has 3 coins. How
many coins are there altogether?

Answer: Coins.

+ _____

A farmer has 5 cows and 4 goats.
Find the total number of animals the farmer has?

Answer: The farmer has..... animals.

+ _____

Sunny bought 5 apples and 3 oranges. How
many number of fruits did Sunny buy?

Answer: Sunny bought..... fruits.

+ _____

Teacher's Signature : _____

Add the following in tens and ones:

$$\begin{array}{r} \text{T} \quad \text{O} \\ 7 \quad 9 \\ + 1 \quad 0 \\ \hline \end{array}$$

$$\begin{array}{r} \text{T} \quad \text{O} \\ 8 \quad 0 \\ + 1 \quad 0 \\ \hline \end{array}$$

$$\begin{array}{r} \text{T} \quad \text{O} \\ 1 \quad 0 \\ + 2 \quad 9 \\ \hline \end{array}$$

$$\begin{array}{r} \text{T} \quad \text{O} \\ 3 \quad 8 \\ + 6 \quad 1 \\ \hline \end{array}$$

$$\begin{array}{r} \text{T} \quad \text{O} \\ 1 \quad 2 \\ + 2 \quad 3 \\ \hline \end{array}$$

$$\begin{array}{r} \text{T} \quad \text{O} \\ 7 \quad 4 \\ + 2 \quad 5 \\ \hline \end{array}$$

$$\begin{array}{r} \text{T} \quad \text{O} \\ 3 \quad 5 \\ + 3 \quad 2 \\ \hline \end{array}$$

$$\begin{array}{r} \text{T} \quad \text{O} \\ 6 \quad 0 \\ + 3 \quad 9 \\ \hline \end{array}$$

$$\begin{array}{r} \text{T} \quad \text{O} \\ 4 \quad 4 \\ + 4 \quad 5 \\ \hline \end{array}$$

$$\begin{array}{r} \text{T} \quad \text{O} \\ 3 \quad 3 \\ + 3 \quad 5 \\ \hline \end{array}$$

$$\begin{array}{r} \text{T} \quad \text{O} \\ 2 \quad 0 \\ + 4 \quad 0 \\ \hline \end{array}$$

$$\begin{array}{r} \text{T} \quad \text{O} \\ 5 \quad 6 \\ + 4 \quad 3 \\ \hline \end{array}$$

$$\begin{array}{r} \text{T} \quad \text{O} \\ 7 \quad 5 \\ + 2 \quad 4 \\ \hline \end{array}$$

$$\begin{array}{r} \text{T} \quad \text{O} \\ 8 \quad 8 \\ + 1 \quad 1 \\ \hline \end{array}$$

$$\begin{array}{r} \text{T} \quad \text{O} \\ 6 \quad 0 \\ + 3 \quad 8 \\ \hline \end{array}$$

$$\begin{array}{r} \text{T} \quad \text{O} \\ 3 \quad 3 \\ + 2 \quad 2 \\ \hline \end{array}$$

$$\begin{array}{r} \text{T} \quad \text{O} \\ 5 \quad 5 \\ + 1 \quad 3 \\ \hline \end{array}$$

$$\begin{array}{r} \text{T} \quad \text{O} \\ 2 \quad 9 \\ + 7 \quad 0 \\ \hline \end{array}$$

$$\begin{array}{r} \text{T} \quad \text{O} \\ 2 \quad 7 \\ + 4 \quad 0 \\ \hline \end{array}$$

$$\begin{array}{r} \text{T} \quad \text{O} \\ 5 \quad 0 \\ + 3 \quad 2 \\ \hline \end{array}$$

Date :

Signature :



Solve the following:

$$\begin{array}{r} T \quad O \\ 4 \quad 2 \\ - 1 \quad 1 \\ \hline \end{array}$$

$$\begin{array}{r} T \quad O \\ 8 \quad 4 \\ - 2 \quad 3 \\ \hline \end{array}$$

$$\begin{array}{r} T \quad O \\ 7 \quad 7 \\ - 2 \quad 0 \\ \hline \end{array}$$

$$\begin{array}{r} T \quad O \\ 8 \quad 2 \\ - 5 \quad 0 \\ \hline \end{array}$$

$$\begin{array}{r} T \quad O \\ 5 \quad 2 \\ - 3 \quad 1 \\ \hline \end{array}$$

$$\begin{array}{r} T \quad O \\ 7 \quad 4 \\ - 2 \quad 2 \\ \hline \end{array}$$

$$\begin{array}{r} T \quad O \\ 8 \quad 3 \\ - 7 \quad 0 \\ \hline \end{array}$$

$$\begin{array}{r} T \quad O \\ 3 \quad 3 \\ - 2 \quad 3 \\ \hline \end{array}$$

$$\begin{array}{r} T \quad O \\ 6 \quad 4 \\ - 1 \quad 2 \\ \hline \end{array}$$

$$\begin{array}{r} T \quad O \\ 4 \quad 4 \\ - 1 \quad 2 \\ \hline \end{array}$$

$$\begin{array}{r} T \quad O \\ 7 \quad 3 \\ - 6 \quad 3 \\ \hline \end{array}$$

$$\begin{array}{r} T \quad O \\ 9 \quad 6 \\ - 8 \quad 3 \\ \hline \end{array}$$

$$\begin{array}{r} T \quad O \\ 7 \quad 2 \\ - 1 \quad 1 \\ \hline \end{array}$$

$$\begin{array}{r} T \quad O \\ 8 \quad 9 \\ - 4 \quad 8 \\ \hline \end{array}$$

$$\begin{array}{r} T \quad O \\ 9 \quad 9 \\ - 8 \quad 8 \\ \hline \end{array}$$

$$\begin{array}{r} T \quad O \\ 5 \quad 5 \\ - 3 \quad 3 \\ \hline \end{array}$$


$$\begin{array}{r} T \quad O \\ 7 \quad 4 \\ - 3 \quad 3 \\ \hline \end{array}$$

$$\begin{array}{r} T \quad O \\ 8 \quad 3 \\ - 3 \quad 1 \\ \hline \end{array}$$

$$\begin{array}{r} T \quad O \\ 6 \quad 3 \\ - 5 \quad 2 \\ \hline \end{array}$$

$$\begin{array}{r} T \quad O \\ 7 \quad 7 \\ - 6 \quad 7 \\ \hline \end{array}$$

Look at the picture of a plant, recognise its parts and write the names of different parts of a plant :



6. _____

4. _____

2. _____

1. _____


5. _____

3. _____

HELP BOX

- | | | |
|-------|--------|--------|
| Roots | Stem | Leaves |
| Bud | Flower | Fruit |

Look at both the pictures. Find five missing things in the second picture :



The Fairly is sad. She has lost her wings and magic wand.
Connect the dots to get Fairy's wand and wings:

